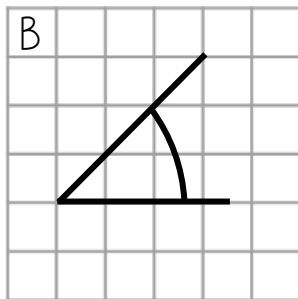
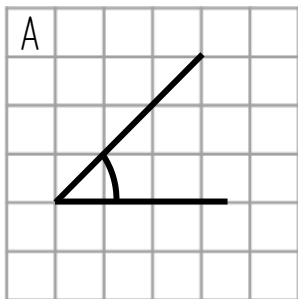
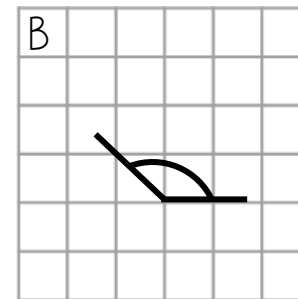
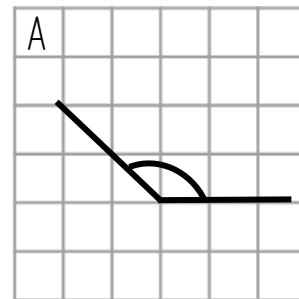


Without using a protractor, decide which angle is the largest in each pair



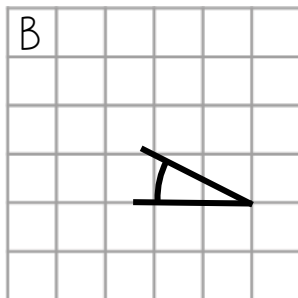
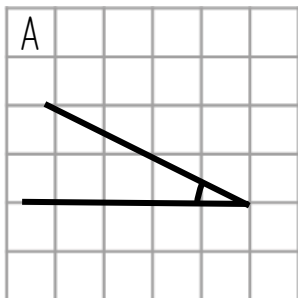
A	
B	
Equal	
Cannot Tell	

Explain your answer



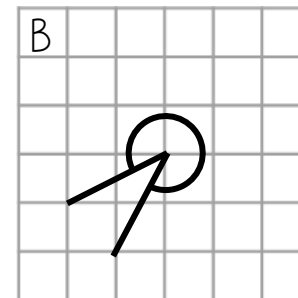
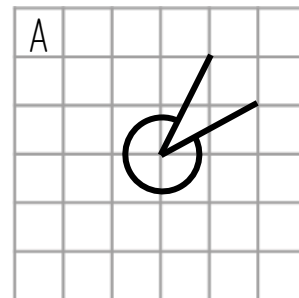
A	
B	
Equal	
Cannot Tell	

Explain your answer



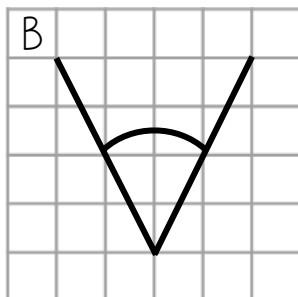
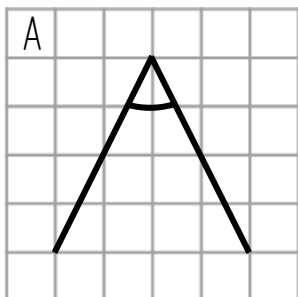
A	
B	
Equal	
Cannot Tell	

Explain your answer



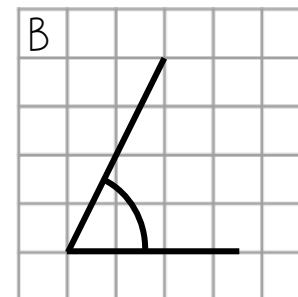
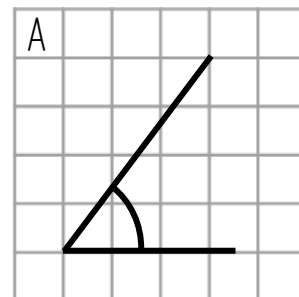
A	
B	
Equal	
Cannot Tell	

Explain your answer



A	
B	
Equal	
Cannot Tell	

Explain your answer



A	
B	
Equal	
Cannot Tell	

Explain your answer

Without using a protractor, decide which angle is the largest in each pair

A		B		A	
				B	
				Equal	
				Cannot Tell	

Explain your answer

A		B		A	
				B	
				Equal	
				Cannot Tell	

Explain your answer

A		B		A	
				B	
				Equal	
				Cannot Tell	

Explain your answer

A		B		A	
				B	
				Equal	
				Cannot Tell	

Explain your answer

A		B		A	
				B	
				Equal	
				Cannot Tell	

Explain your answer

A		B		A	
				B	
				Equal	
				Cannot Tell	

Explain your answer

Without using a protractor, decide which angle is the largest in each pair

A		B		A	
				B	
				Equal	
				Cannot Tell	

Explain your answer

A		B		A	
				B	
				Equal	
				Cannot Tell	

Explain your answer

A		B		A	
				B	
				Equal	
				Cannot Tell	

Explain your answer

A		B		A	
				B	
				Equal	
				Cannot Tell	

Explain your answer

A		B		A	
				B	
				Equal	
				Cannot Tell	

Explain your answer

A		B		A	
				B	
				Equal	
				Cannot Tell	

Explain your answer

Without using a protractor, decide which angle is the largest in each pair

A		B		A	
				B	
				Equal	
				Cannot Tell	

Explain your answer

A		B		A	
				B	
				Equal	
				Cannot Tell	

Explain your answer

A		B		A	
				B	
				Equal	
				Cannot Tell	

Explain your answer

A		B		A	
				B	
				Equal	
				Cannot Tell	

Explain your answer

A		B		A	
				B	
				Equal	
				Cannot Tell	

Explain your answer

A		B		A	
				B	
				Equal	
				Cannot Tell	

Explain your answer

Without using a protractor, decide which angle is the largest in each pair

A		B		A	
				B	
				Equal	
				Cannot Tell	

Explain your answer

A		B		A	
				B	
				Equal	
				Cannot Tell	

Explain your answer

A		B		A	
				B	
				Equal	
				Cannot Tell	

Explain your answer

A		B		A	
				B	
				Equal	
				Cannot Tell	

Explain your answer

A		B		A	
				B	
				Equal	
				Cannot Tell	

Explain your answer

A		B		A	
				B	
				Equal	
				Cannot Tell	

Explain your answer