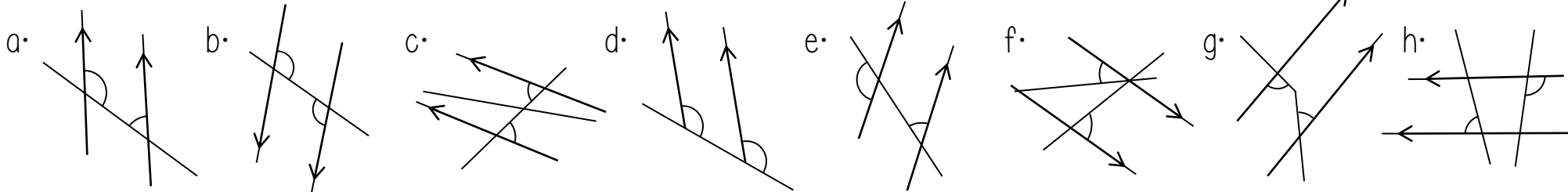
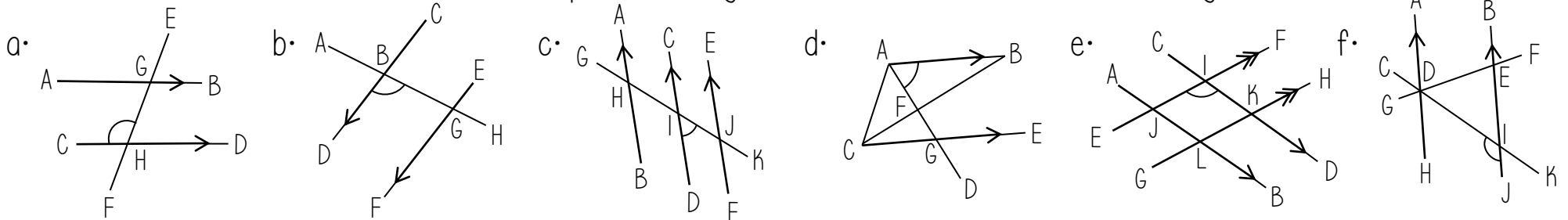


The diagrams are not drawn accurately

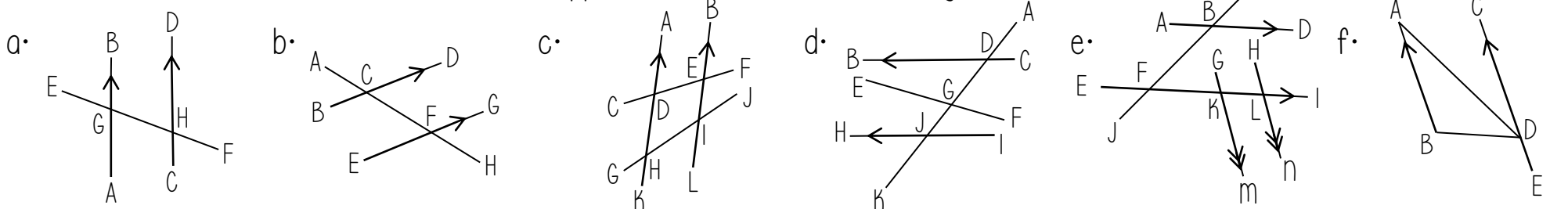
1. Do the diagrams show alternate angles? Provide a reason for your answer.



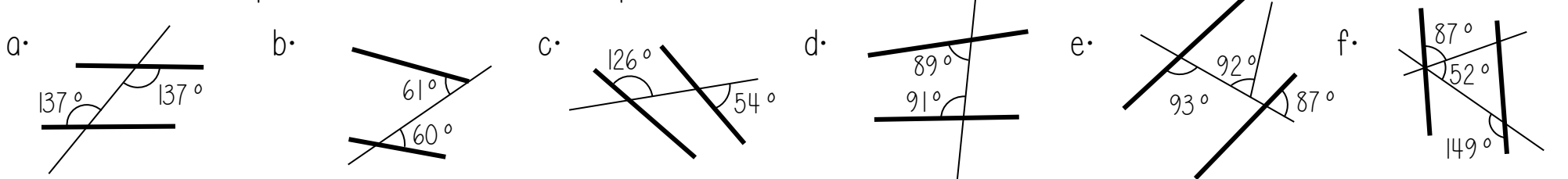
2. Write down the three letter notation for any alternate angles to the one that is marked on the diagram.



3. Write down the three letter notation for any pairs (or more) of alternate angles.

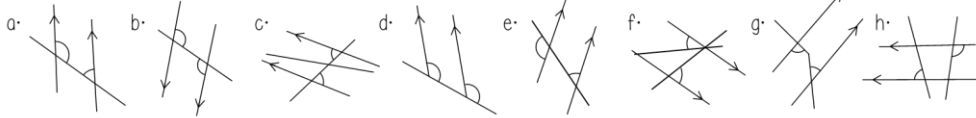


4. Are the bold lines parallel? Provide a reason for your answer.

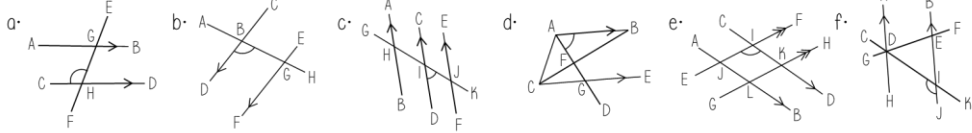


The diagrams are not drawn accurately

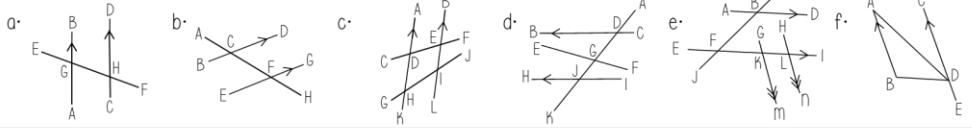
1. Do the diagrams show alternate angles? Provide a reason for your answer.



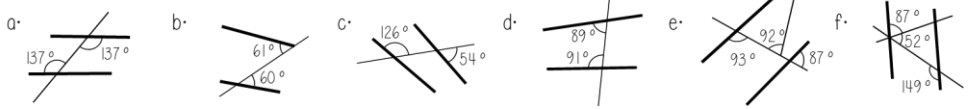
2. Write down the three letter notation for any alternate angles to the one that is marked on the diagram



3. Write down the three letter notation for any pairs (or more) of alternate angles

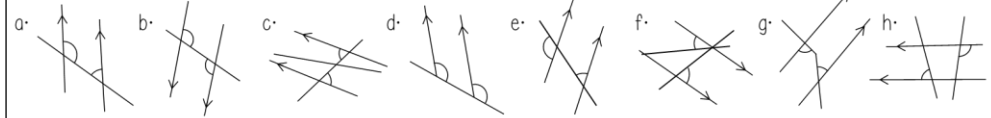


4. Are the bold lines parallel? Provide a reason for your answer.

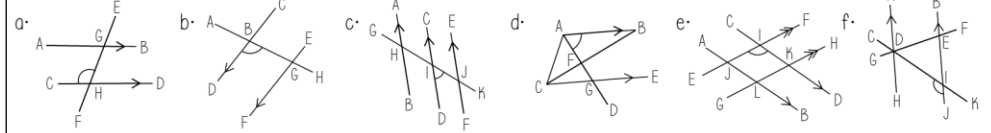


The diagrams are not drawn accurately

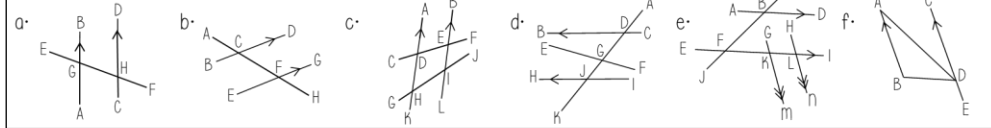
1. Do the diagrams show alternate angles? Provide a reason for your answer.



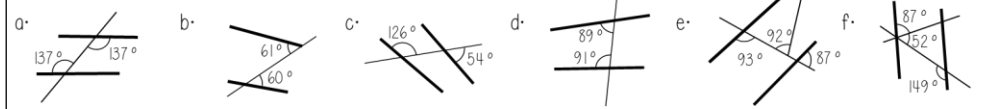
2. Write down the three letter notation for any alternate angles to the one that is marked on the diagram



3. Write down the three letter notation for any pairs (or more) of alternate angles

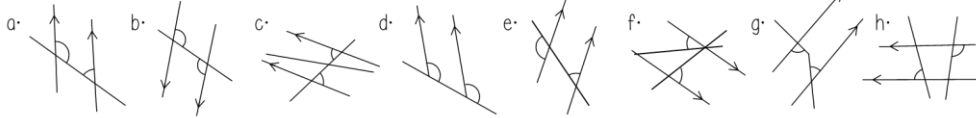


4. Are the bold lines parallel? Provide a reason for your answer.

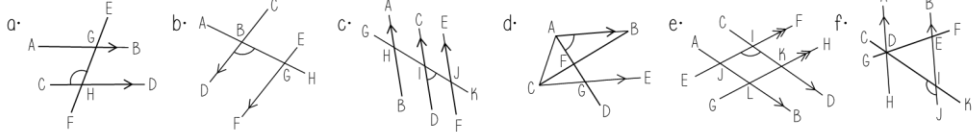


The diagrams are not drawn accurately

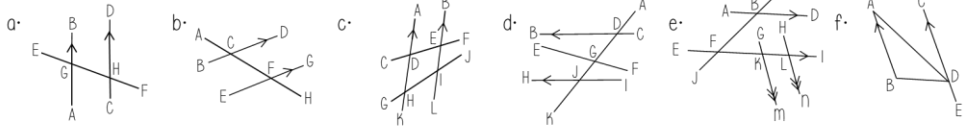
1. Do the diagrams show alternate angles? Provide a reason for your answer.



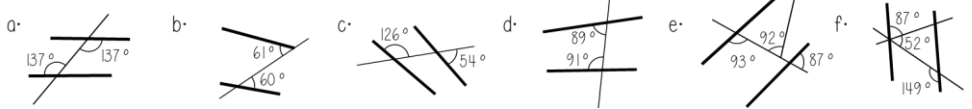
2. Write down the three letter notation for any alternate angles to the one that is marked on the diagram



3. Write down the three letter notation for any pairs (or more) of alternate angles

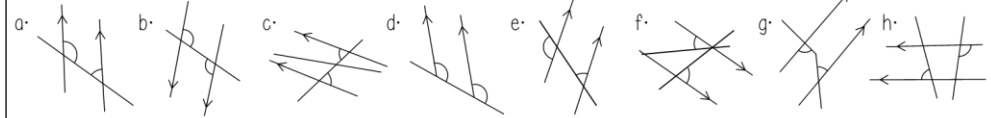


4. Are the bold lines parallel? Provide a reason for your answer.

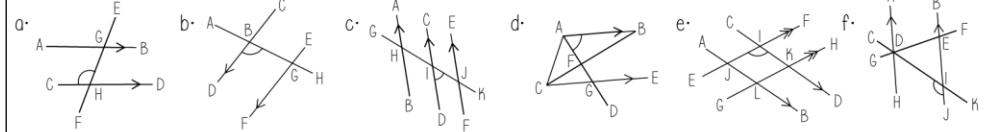


The diagrams are not drawn accurately

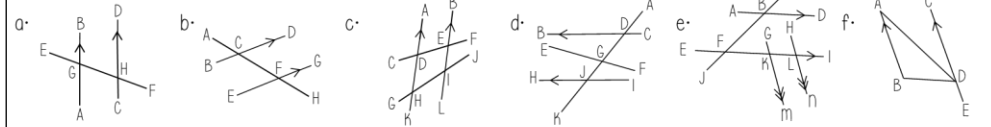
1. Do the diagrams show alternate angles? Provide a reason for your answer.



2. Write down the three letter notation for any alternate angles to the one that is marked on the diagram



3. Write down the three letter notation for any pairs (or more) of alternate angles



4. Are the bold lines parallel? Provide a reason for your answer.

