

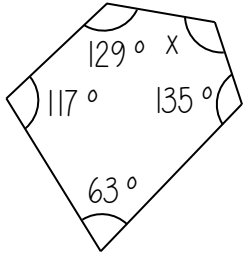
The diagrams are not drawn accurately

1. Find the sum of the interior angles in each polygon

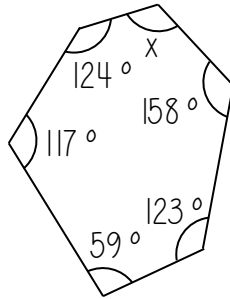
- a. 12 sides b. 15 sides c. 18 sides d. 22 sides e. 25 sides f. 30 sides g. 52 sides h. 120 sides

2. Find the value of x

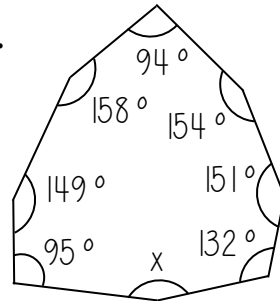
a.



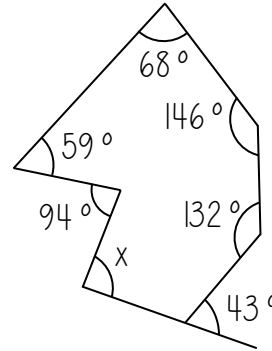
b.



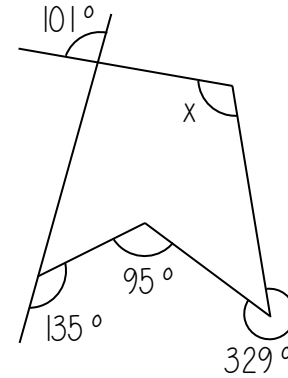
c.



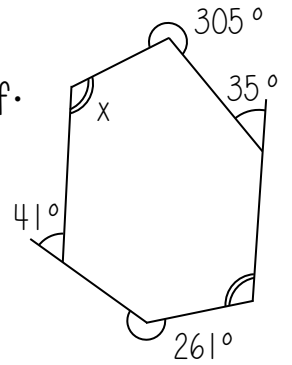
d.



e.



f.

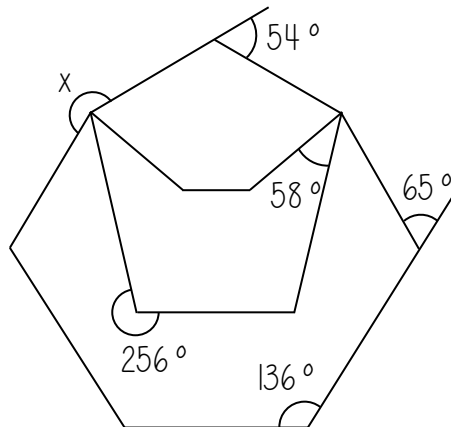


3. Find the number of sides each polygons has, given the sum of the interior angles

- a. 1800° b. 1980° c. 3060° d. 3240° e. 3780° f. 5940° g. 9720° h. 14220°

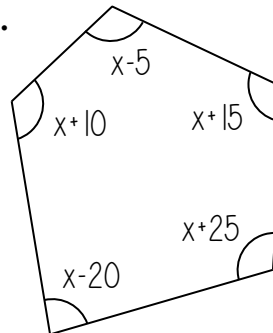
4.

The polygon has one line of symmetry.
Find the value of x .

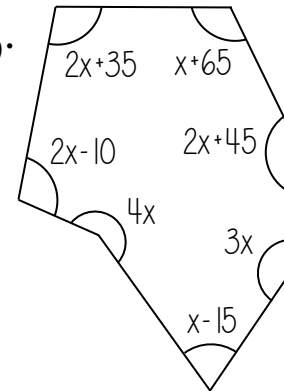


5. Find the value of x (and y)

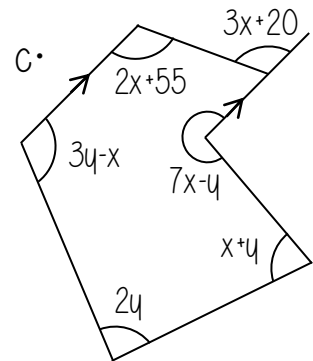
a.



b.



c.

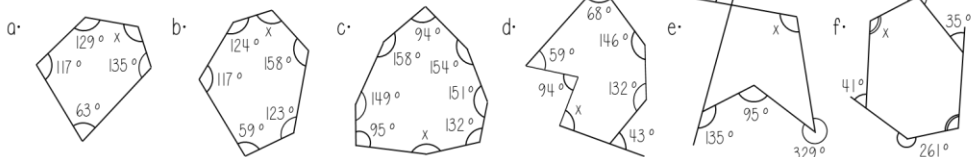


The diagrams are not drawn accurately

1. Find the sum of the interior angles in each polygon

a. 12 sides b. 15 sides c. 18 sides d. 22 sides e. 25 sides f. 30 sides g. 52 sides h. 120 sides

2. Find the value of x

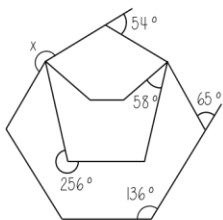


3. Find the number of sides each polygons has, given the sum of the interior angles

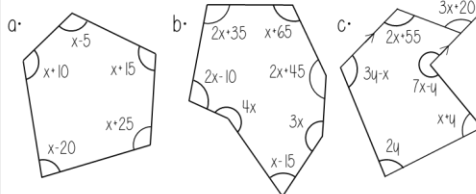
a. 1800° b. 1980° c. 3060° d. 3240° e. 3780° f. 5940° g. 9720° h. 14220°

4.

The polygon has one line of symmetry
Find the value of x



5. Find the value of x (and y)

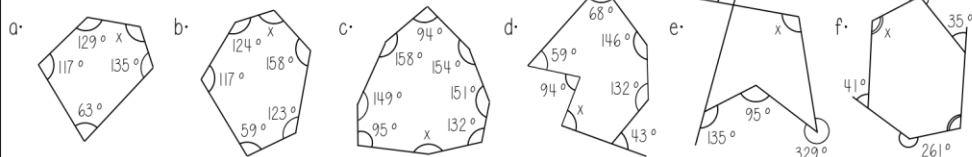


The diagrams are not drawn accurately

1. Find the sum of the interior angles in each polygon

a. 12 sides b. 15 sides c. 18 sides d. 22 sides e. 25 sides f. 30 sides g. 52 sides h. 120 sides

2. Find the value of x

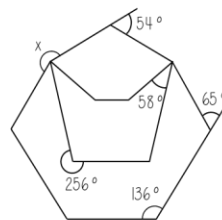


3. Find the number of sides each polygons has, given the sum of the interior angles

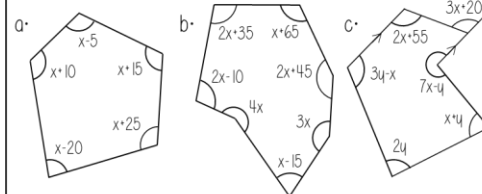
a. 1800° b. 1980° c. 3060° d. 3240° e. 3780° f. 5940° g. 9720° h. 14220°

4.

The polygon has one line of symmetry
Find the value of x



5. Find the value of x (and y)

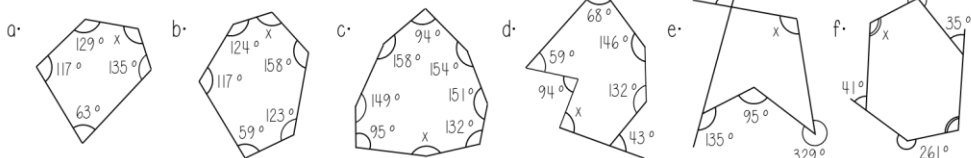


The diagrams are not drawn accurately

1. Find the sum of the interior angles in each polygon

a. 12 sides b. 15 sides c. 18 sides d. 22 sides e. 25 sides f. 30 sides g. 52 sides h. 120 sides

2. Find the value of x

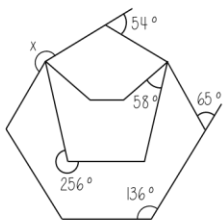


3. Find the number of sides each polygons has, given the sum of the interior angles

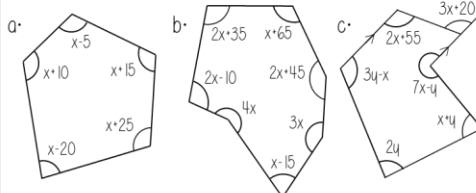
a. 1800° b. 1980° c. 3060° d. 3240° e. 3780° f. 5940° g. 9720° h. 14220°

4.

The polygon has one line of symmetry
Find the value of x



5. Find the value of x (and y)

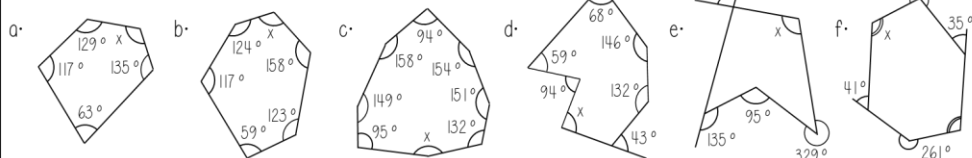


The diagrams are not drawn accurately

1. Find the sum of the interior angles in each polygon

a. 12 sides b. 15 sides c. 18 sides d. 22 sides e. 25 sides f. 30 sides g. 52 sides h. 120 sides

2. Find the value of x

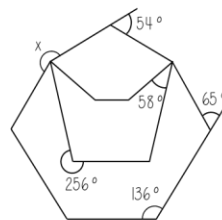


3. Find the number of sides each polygons has, given the sum of the interior angles

a. 1800° b. 1980° c. 3060° d. 3240° e. 3780° f. 5940° g. 9720° h. 14220°

4.

The polygon has one line of symmetry
Find the value of x



5. Find the value of x (and y)

